


Chapter 10 – Activity 5 - Questions 1-4


1



Use arrows to show these.
Label each arrow.

- a 1.7 cm b 4.1 cm c 5.0 cm d 96.5 cm e 95.8 cm f 99.3 cm

2




Use arrows to show these.
Label each arrow.

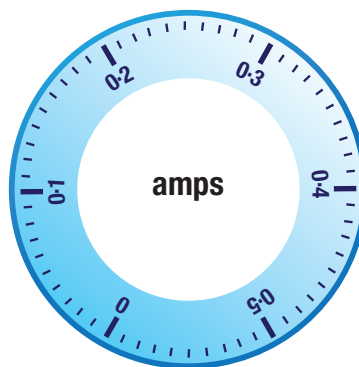
- a 2.3 m b 2.35 m c 2.42 m d 2.17 m e 2.08 m f 2.26 m

3 Use arrows to show these.


a 3.5 kg



b 0.16 amps



c 0.34 ml



4 Use an arrow to show the number given beside the scale.

